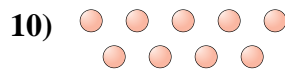
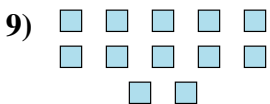

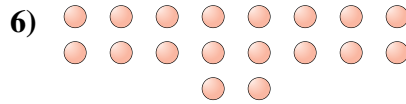

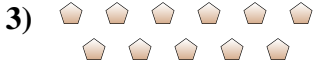
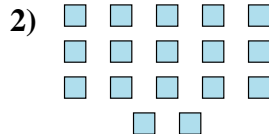
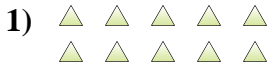




Determine if the number of shapes is even or odd.



Answers

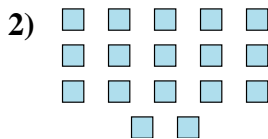
1. _____
2. _____
3. _____
4. _____
5. _____
6. _____
7. _____
8. _____
9. _____
10. _____



Determine if the number of shapes is even or odd.



10



17



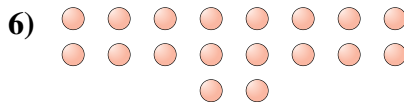
11



19



14



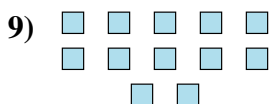
18



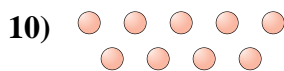
18



8



12



9

Answers

1. even

2. odd

3. odd

4. odd

5. even

6. even

7. even

8. even

9. even

10. odd